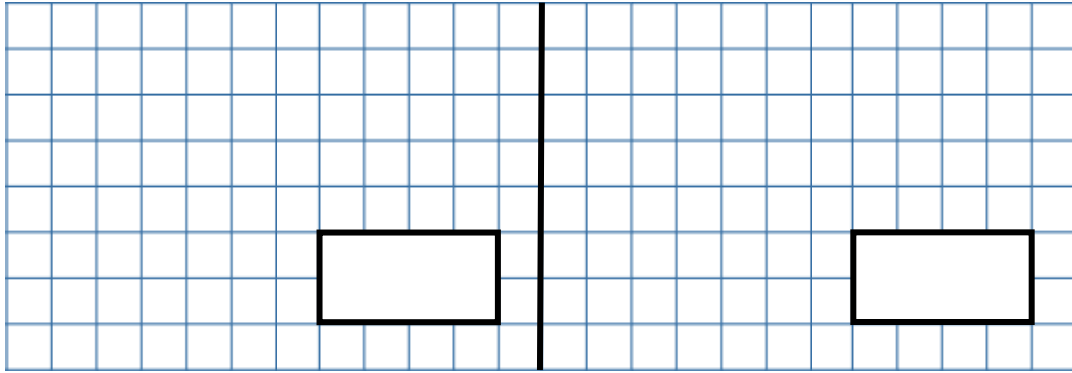


(7) $442 \div 3 =$

(8) $501 \div 2 =$

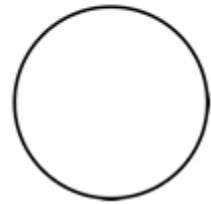
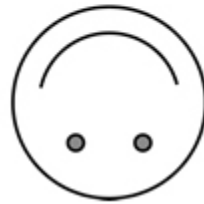
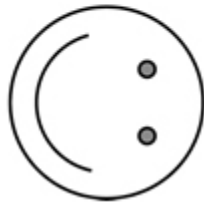


(9)

The diagram shows a rotating face.

The face rotates clockwise through one right angle each time.

Complete the last face.



(10)

Missing angle

Work out the size of angle y

